

Discrete Mathematics

Graphs

H. Turgut Uyar Ayşegül Gençata Yayımlı Emre Harmancı

2001-2016

License



© 2001-2016 T. Uyar, A. Yayımlı, E. Harmancı

You are free to:

- Share – copy and redistribute the material in any medium or format
- Adapt – remix, transform, and build upon the material

Under the following terms:

- Attribution – You must give appropriate credit, provide a link to the license, and indicate if changes were made.
- NonCommercial – You may not use the material for commercial purposes.
- ShareAlike – If you remix, transform, or build upon the material, you must distribute your contributions under the same license as the original.

For more information:

<https://creativecommons.org/licenses/by-nc-sa/4.0/>

Read the full license:

<https://creativecommons.org/licenses/by-nc-sa/4.0/legalcode>

Topics

1 Graphs

- Introduction
- Walks
- Traversable Graphs
- Planar Graphs

2 Graph Problems

- Connectivity
- Graph Coloring
- Shortest Path
- TSP
- Searching Graphs

Topics

1 Graphs

- Introduction
- Walks
- Traversable Graphs
- Planar Graphs

2 Graph Problems

- Connectivity
- Graph Coloring
- Shortest Path
- TSP
- Searching Graphs

Graphs

Definition

graph: $G = (V, E)$

- V : **node** (or *vertex*) set
- $E \subseteq V \times V$: **edge** set

- $e = (v_1, v_2) \in E$:
- v_1 and v_2 are *endnodes* of e
- e is *incident* to v_1 and v_2
- v_1 and v_2 are *adjacent*

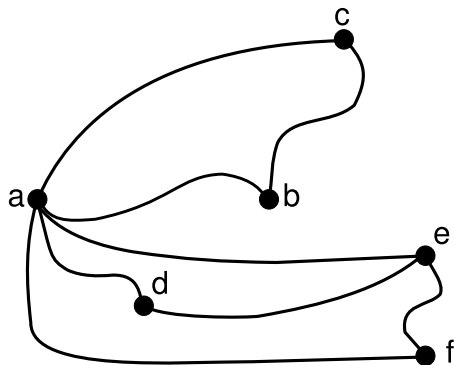
Graphs

Definition

graph: $G = (V, E)$

- V : **node** (or *vertex*) set
- $E \subseteq V \times V$: **edge** set
- $e = (v_1, v_2) \in E$:
- v_1 and v_2 are *endnodes* of e
- e is *incident* to v_1 and v_2
- v_1 and v_2 are *adjacent*

Graph Example



$$V = \{a, b, c, d, e, f\}$$

$$E = \{(a, b), (a, c), (a, d), (a, e), (a, f), (b, c), (d, e), (e, f)\}$$

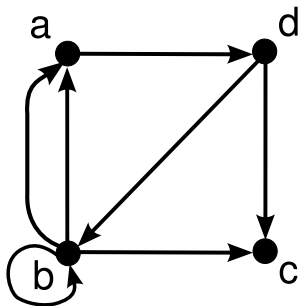
Directed Graphs

Definition

directed graph (*digraph*): $D = (V, A)$

- V : node set
- $A \subseteq V \times V$: **arc** set
- $a = (v_1, v_2) \in A$:
- v_1 : *origin* node of a
- v_2 : *terminating* node of a

Directed Graph Example



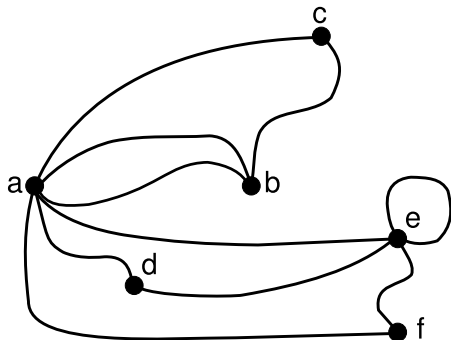
Weighted Graphs

- weighted graph: labels assigned to edges
- weight
- length, distance
- cost, delay
- probability
- ...

Multigraphs

- **parallel edges**: edges between same node pair
- **loop**: edge starting and ending in same node
- **plain** graph: no loops, no parallel edges
- **multigraph**: a graph which is not plain

Multigraph Example



■ parallel edges: (a, b)

■ loop: (e, e)

Subgraph

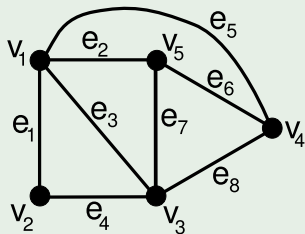
Definition

$G' = (V', E')$ is a **subgraph** of $G = (V, E)$:
 $V' \subseteq V \wedge E' \subseteq E \wedge \forall (v_1, v_2) \in E' [v_1, v_2 \in V']$

Incidence Matrix

- rows: nodes, columns: edges
- 1 if edge incident on node, 0 otherwise

example

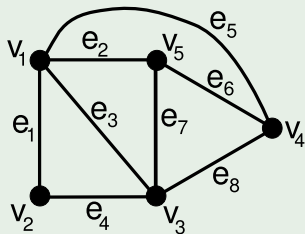


	e_1	e_2	e_3	e_4	e_5	e_6	e_7	e_8
v_1	1	1	1	0	1	0	0	0
v_2	1	0	0	1	0	0	0	0
v_3	0	0	1	1	0	0	1	1
v_4	0	0	0	0	1	1	0	1
v_5	0	1	0	0	0	1	1	0

Adjacency Matrix

- rows: nodes, columns: nodes
- 1 if nodes are adjacent, 0 otherwise

example

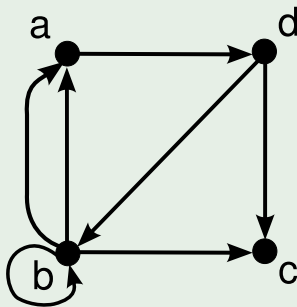


	v_1	v_2	v_3	v_4	v_5
v_1	0	1	1	1	1
v_2	1	0	1	0	0
v_3	1	1	0	1	1
v_4	1	0	1	0	1
v_5	1	0	1	1	0

Adjacency Matrix

- multigraph: number of edges between nodes

example



	<i>a</i>	<i>b</i>	<i>c</i>	<i>d</i>
<i>a</i>	0	0	0	1
<i>b</i>	2	1	1	0
<i>c</i>	0	0	0	0
<i>d</i>	0	1	1	0

Adjacency Matrix

- weighted graph: weight of edge

Degree

- **degree** of node: number of incident edges

Theorem

d_i : degree of v_i

$$|E| = \frac{\sum_i d_i}{2}$$

Degree

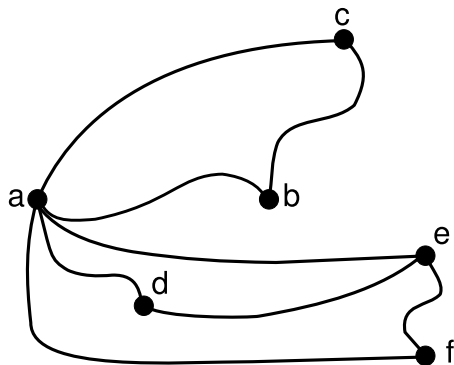
- **degree** of node: number of incident edges

Theorem

d_i : degree of v_i

$$|E| = \frac{\sum_i d_i}{2}$$

Degree Example



$$d_a = 5$$

$$d_b = 2$$

$$d_c = 2$$

$$d_d = 2$$

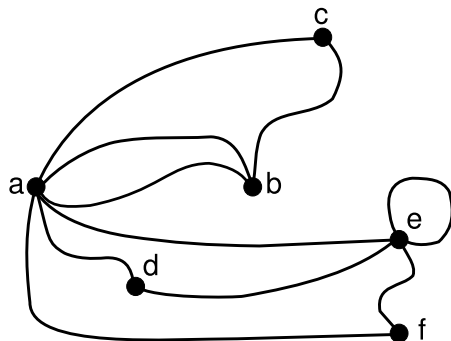
$$d_e = 3$$

$$d_f = 2$$

$$16$$

$$|E| = 8$$

Multigraph Degree Example



$$d_a = 6$$

$$d_b = 3$$

$$d_c = 2$$

$$d_d = 2$$

$$d_e = 5$$

$$d_f = 2$$

$$20$$

$$|E| = 10$$

Degree in Directed Graphs

- *in-degree*: d_v^i
- *out-degree*: d_v^o
- node with in-degree 0: *source*
- node with out-degree 0: *sink*
- $\sum_{v \in V} d_v^i = \sum_{v \in V} d_v^o = |A|$

Degree in Directed Graphs

- *in-degree*: d_v^i
- *out-degree*: d_v^o
- node with in-degree 0: *source*
- node with out-degree 0: *sink*
- $\sum_{v \in V} d_v^i = \sum_{v \in V} d_v^o = |A|$

Degree in Directed Graphs

- *in-degree*: d_v^i
- *out-degree*: d_v^o
- node with in-degree 0: *source*
- node with out-degree 0: *sink*
- $\sum_{v \in V} d_v^i = \sum_{v \in V} d_v^o = |A|$

Degree

Theorem

In an undirected graph, there is an even number of nodes which have an odd degree.

Proof.

- t_i : number of nodes of degree i

$$2|E| = \sum_i d_i = 1t_1 + 2t_2 + 3t_3 + 4t_4 + 5t_5 + \dots$$

$$2|E| - 2t_2 - 4t_4 - \dots = t_1 + t_3 + t_5 + \dots + 2t_3 + 4t_5 + \dots$$

$$2|E| - 2t_2 - 4t_4 - \dots - 2t_3 - 4t_5 - \dots = t_1 + t_3 + t_5 + \dots$$

- left-hand side even \Rightarrow right-hand side even



Degree

Theorem

In an undirected graph, there is an even number of nodes which have an odd degree.

Proof.

- t_i : number of nodes of degree i

$$2|E| = \sum_i d_i = 1t_1 + 2t_2 + 3t_3 + 4t_4 + 5t_5 + \dots$$

$$2|E| - 2t_2 - 4t_4 - \dots = t_1 + t_3 + t_5 + \dots + 2t_3 + 4t_5 + \dots$$

$$2|E| - 2t_2 - 4t_4 - \dots - 2t_3 - 4t_5 - \dots = t_1 + t_3 + t_5 + \dots$$

- left-hand side even \Rightarrow right-hand side even



Degree

Theorem

In an undirected graph, there is an even number of nodes which have an odd degree.

Proof.

- t_i : number of nodes of degree i

$$2|E| = \sum_i d_i = 1t_1 + 2t_2 + 3t_3 + 4t_4 + 5t_5 + \dots$$

$$2|E| - 2t_2 - 4t_4 - \dots = t_1 + t_3 + t_5 + \dots + 2t_3 + 4t_5 + \dots$$

$$2|E| - 2t_2 - 4t_4 - \dots - 2t_3 - 4t_5 - \dots = t_1 + t_3 + t_5 + \dots$$

- left-hand side even \Rightarrow right-hand side even



Degree

Theorem

In an undirected graph, there is an even number of nodes which have an odd degree.

Proof.

- t_i : number of nodes of degree i

$$2|E| = \sum_i d_i = 1t_1 + 2t_2 + 3t_3 + 4t_4 + 5t_5 + \dots$$

$$2|E| - 2t_2 - 4t_4 - \dots = t_1 + t_3 + t_5 + \dots + 2t_3 + 4t_5 + \dots$$

$$2|E| - 2t_2 - 4t_4 - \dots - 2t_3 - 4t_5 - \dots = t_1 + t_3 + t_5 + \dots$$

- left-hand side even \Rightarrow right-hand side even



Degree

Theorem

In an undirected graph, there is an even number of nodes which have an odd degree.

Proof.

- t_i : number of nodes of degree i

$$2|E| = \sum_i d_i = 1t_1 + 2t_2 + 3t_3 + 4t_4 + 5t_5 + \dots$$

$$2|E| - 2t_2 - 4t_4 - \dots = t_1 + t_3 + t_5 + \dots + 2t_3 + 4t_5 + \dots$$

$$2|E| - 2t_2 - 4t_4 - \dots - 2t_3 - 4t_5 - \dots = t_1 + t_3 + t_5 + \dots$$

- left-hand side even \Rightarrow right-hand side even



Degree

Theorem

In an undirected graph, there is an even number of nodes which have an odd degree.

Proof.

- t_i : number of nodes of degree i

$$2|E| = \sum_i d_i = 1t_1 + 2t_2 + 3t_3 + 4t_4 + 5t_5 + \dots$$

$$2|E| - 2t_2 - 4t_4 - \dots = t_1 + t_3 + t_5 + \dots + 2t_3 + 4t_5 + \dots$$

$$2|E| - 2t_2 - 4t_4 - \dots - 2t_3 - 4t_5 - \dots = t_1 + t_3 + t_5 + \dots$$

- left-hand side even \Rightarrow right-hand side even



Isomorphism

Definition

$G = (V, E)$ and $G^* = (V^*, E^*)$ are **isomorphic**:

$\exists f : V \rightarrow V^* [(u, v) \in E \Rightarrow (f(u), f(v)) \in E^*] \wedge f$ is bijective

- G and G^* can be drawn the same way

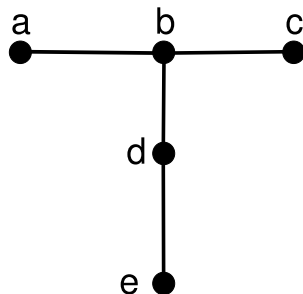
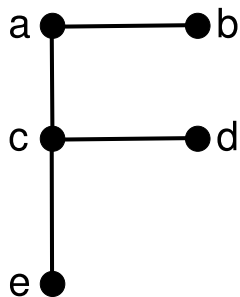
Isomorphism

Definition

$G = (V, E)$ and $G^* = (V^*, E^*)$ are **isomorphic**:
 $\exists f : V \rightarrow V^* [(u, v) \in E \Rightarrow (f(u), f(v)) \in E^*] \wedge f$ is bijective

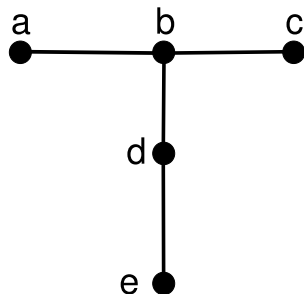
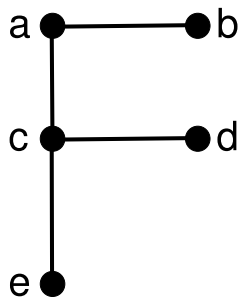
- G and G^* can be drawn the same way

Isomorphism Example



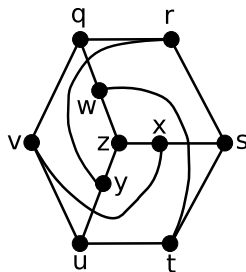
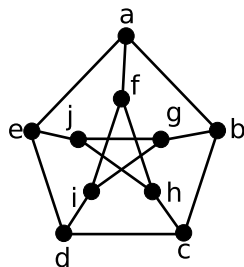
■ $f = (a \mapsto d, b \mapsto e, c \mapsto b, d \mapsto c, e \mapsto a)$

Isomorphism Example



■ $f = (a \mapsto d, b \mapsto e, c \mapsto b, d \mapsto c, e \mapsto a)$

Petersen Graph



- $f = (a \mapsto q, b \mapsto v, c \mapsto u, d \mapsto y, e \mapsto r,$
 $f \mapsto w, g \mapsto x, h \mapsto t, i \mapsto z, j \mapsto s)$

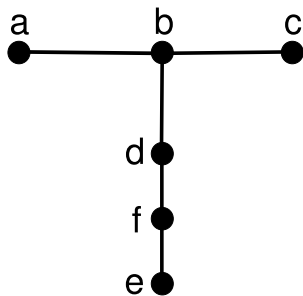
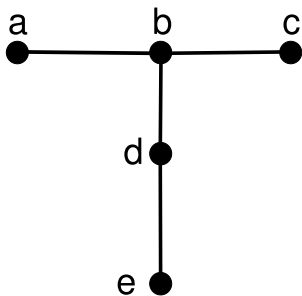
Homeomorphism

Definition

$G = (V, E)$ and $G^* = (V^*, E^*)$ are **homeomorphic**:

- G and G^* isomorphic, except that
- some edges in E^* are divided with additional nodes

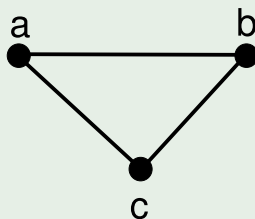
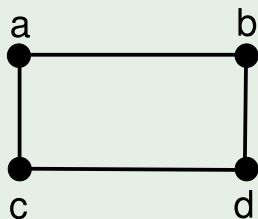
Homeomorphism Example



Regular Graphs

- **regular** graph: all nodes have the same degree
- n -regular: all nodes have degree n

examples

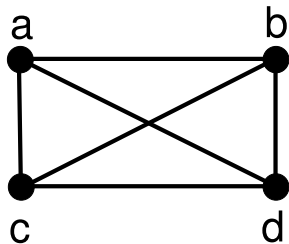


Completely Connected Graphs

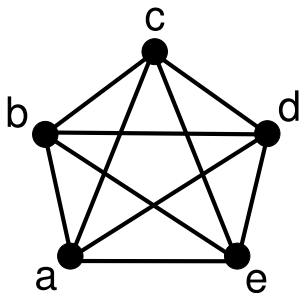
- $G = (V, E)$ is **completely connected**:
 $\forall v_1, v_2 \in V \ (v_1, v_2) \in E$
- every pair of nodes are adjacent
- K_n : completely connected graph with n nodes

Completely Connected Graph Examples

K_4



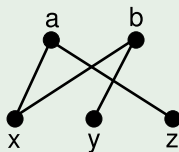
K_5



Bipartite Graphs

- $G = (V, E)$ is **bipartite**: $V_1 \cup V_2 = V$, $V_1 \cap V_2 = \emptyset$
 $\forall (v_1, v_2) \in E [v_1 \in V_1 \wedge v_2 \in V_2]$

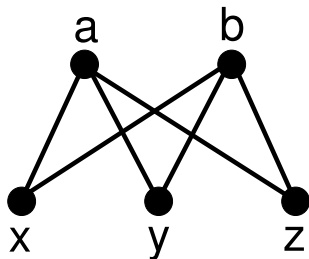
example



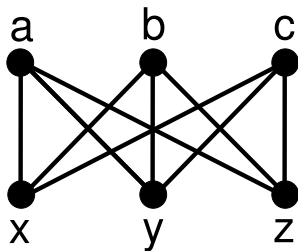
- *complete bipartite*: $\forall v_1 \in V_1 \forall v_2 \in V_2 (v_1, v_2) \in E$
- $K_{m,n}$: $|V_1| = m$, $|V_2| = n$

Complete Bipartite Graph Examples

$K_{2,3}$



$K_{3,3}$



Topics

1 Graphs

- Introduction
- **Walks**
- Traversable Graphs
- Planar Graphs

2 Graph Problems

- Connectivity
- Graph Coloring
- Shortest Path
- TSP
- Searching Graphs

Walk

- **walk**: sequence of nodes and edges
from a starting node (v_0) to an ending node (v_n)

$$v_0 \xrightarrow{e_1} v_1 \xrightarrow{e_2} v_2 \xrightarrow{e_3} v_3 \rightarrow \cdots \rightarrow v_{n-1} \xrightarrow{e_n} v_n$$

where $e_i = (v_{i-1}, v_i)$

- no need to write the edges if not weighted
- **length**: number of edges
- $v_0 = v_n$: **closed**

Walk

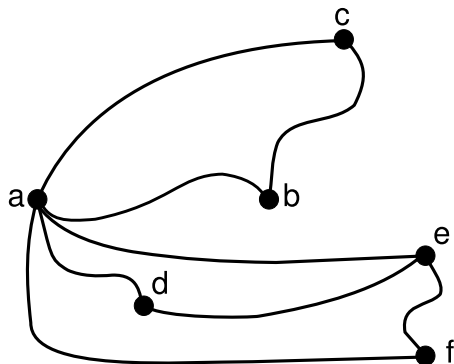
- **walk**: sequence of nodes and edges
from a starting node (v_0) to an ending node (v_n)

$$v_0 \xrightarrow{e_1} v_1 \xrightarrow{e_2} v_2 \xrightarrow{e_3} v_3 \rightarrow \cdots \rightarrow v_{n-1} \xrightarrow{e_n} v_n$$

where $e_i = (v_{i-1}, v_i)$

- no need to write the edges if not weighted
- **length**: number of edges
- $v_0 = v_n$: **closed**

Walk Example



$$\begin{array}{l} c \xrightarrow{(c,b)} b \xrightarrow{(b,a)} a \xrightarrow{(a,d)} d \\ \xrightarrow{(d,e)} e \xrightarrow{(e,f)} f \xrightarrow{(f,a)} a \\ \xrightarrow{(a,b)} b \end{array}$$

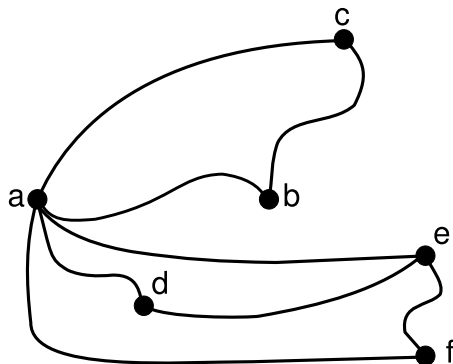
$$\begin{array}{l} c \rightarrow b \rightarrow a \rightarrow d \rightarrow e \\ \rightarrow f \rightarrow a \rightarrow b \end{array}$$

length: 7

Trail

- **trail**: edges not repeated
- **circuit**: closed trail
- **spanning** trail: covers all edges

Trail Example



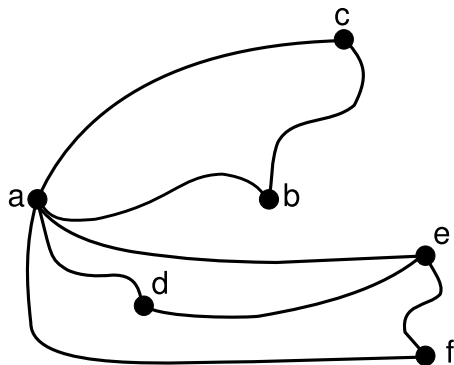
$$\begin{array}{l} c \xrightarrow{(c,b)} b \xrightarrow{(b,a)} a \xrightarrow{(a,e)} e \\ \quad \xrightarrow{(e,d)} d \xrightarrow{(d,a)} a \xrightarrow{(a,f)} f \end{array}$$

$$c \rightarrow a \rightarrow e \rightarrow d \rightarrow a \rightarrow f$$

Path

- **path**: nodes not repeated
- **cycle**: closed path
- **spanning** path: visits all nodes

Path Example



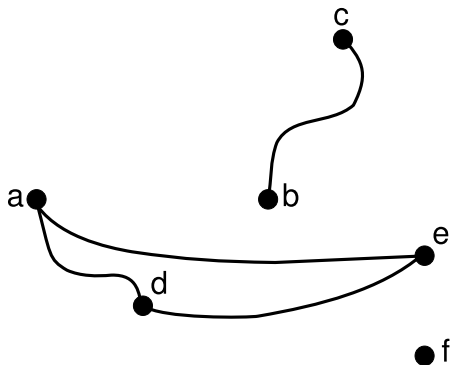
$$\begin{array}{ccccccc} c & \xrightarrow{(c,b)} & b & \xrightarrow{(b,a)} & a & \xrightarrow{(a,d)} & d \\ & \xrightarrow{(d,e)} & e & \xrightarrow{(e,f)} & f & & \end{array}$$

$$c \rightarrow b \rightarrow a \rightarrow d \rightarrow e \rightarrow f$$

Connected Graphs

- **connected**: a path between every pair of nodes
- a disconnected graph can be divided into connected components

Connected Components Example

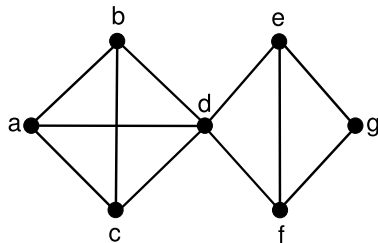


- disconnected:
no path between a and c
- connected components:
 a, d, e
 b, c
 f

Distance

- **distance** between v_i and v_j :
length of shortest path between v_i and v_j
- **diameter** of graph: largest distance in graph

Distance Example

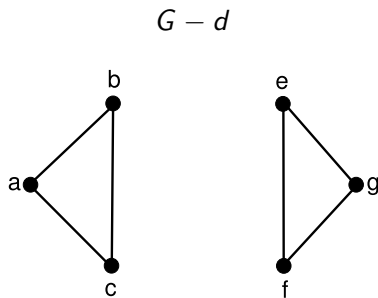
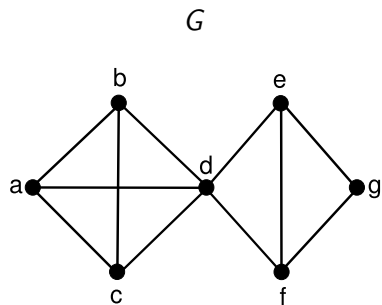


- distance between a and e : 2
- diameter: 3

Cut-Points

- $G - v$: delete v and all its incident edges from G
- v is a **cut-point** for G :
 G is connected but $G - v$ is not

Cut-Point Example

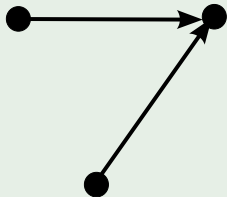


Directed Walks

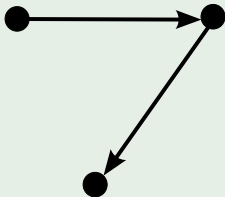
- ignoring directions on arcs: *semi-walk*, *semi-trail*, *semi-path*
- if between every pair of nodes there is:
- a semi-path: **weakly** connected
- a path from one to the other: **unilaterally** connected
- a path: **strongly** connected

Directed Graph Examples

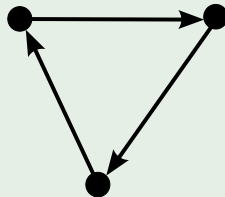
weakly



unilaterally



strongly



Topics

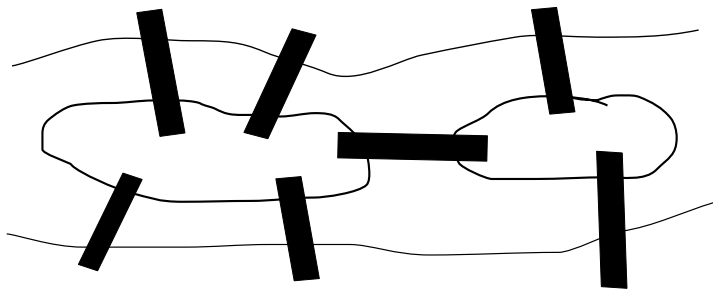
1 Graphs

- Introduction
- Walks
- **Traversable Graphs**
- Planar Graphs

2 Graph Problems

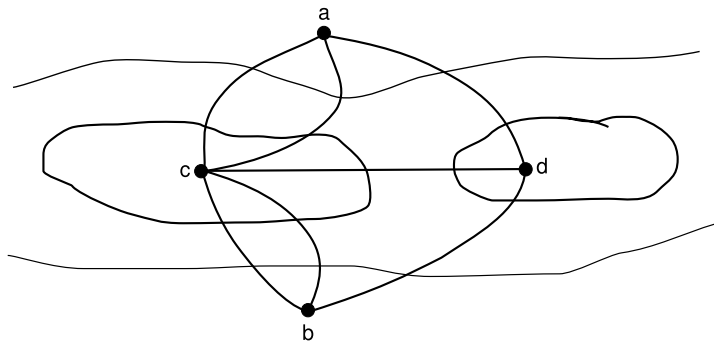
- Connectivity
- Graph Coloring
- Shortest Path
- TSP
- Searching Graphs

Bridges of Königsberg



- cross each bridge exactly once and return to the starting point

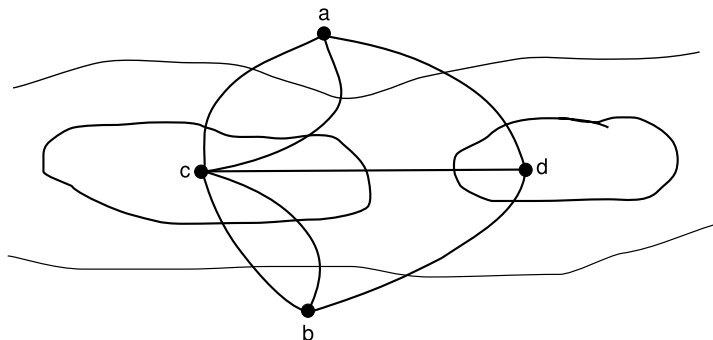
Graphs



Traversable Graphs

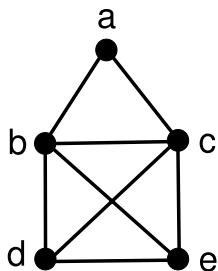
- G is **traversable**: G contains a spanning trail
- a node with an odd degree must be either the starting node or the ending node of the trail
- all nodes except the starting node and the ending node must have even degrees

Bridges of Königsberg



- all nodes have odd degrees: not traversable

Traversable Graph Example



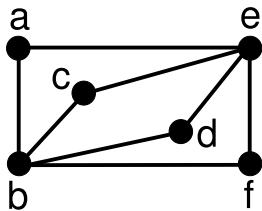
- a, b, c : even
- d, e : odd
- start from d , end at e :
 $d \rightarrow b \rightarrow a \rightarrow c \rightarrow e$
 $\rightarrow d \rightarrow c \rightarrow b \rightarrow e$

Euler Graphs

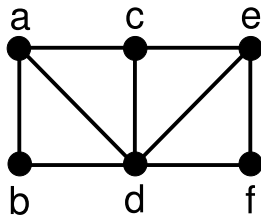
- **Euler graph**: contains closed spanning trail
- G is an Euler graph \Leftrightarrow all nodes in G have even degrees

Euler Graph Examples

Euler



not Euler

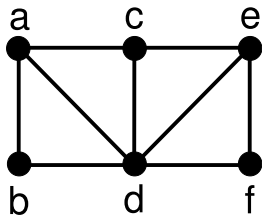


Hamilton Graphs

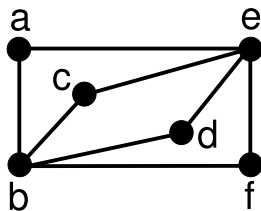
- **Hamilton graph**: contains a closed spanning path

Hamilton Graph Examples

Hamilton



not Hamilton



Topics

1 Graphs

- Introduction
- Walks
- Traversable Graphs
- Planar Graphs

2 Graph Problems

- Connectivity
- Graph Coloring
- Shortest Path
- TSP
- Searching Graphs

Planar Graphs

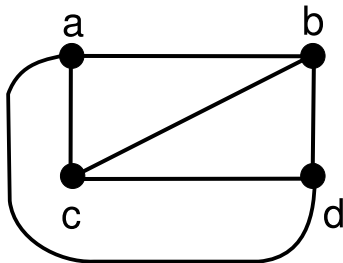
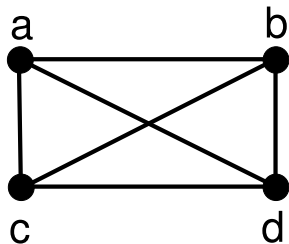
Definition

G is **planar**:

G can be drawn on a plane without intersecting its edges

- a **map** of G : a planar drawing of G

Planar Graph Example



Regions

- map divides plane into **regions**
- degree of region: length of closed trail that surrounds region

Theorem

d_{r_i} : degree of region r_i

$$|E| = \frac{\sum_i d_{r_i}}{2}$$

Regions

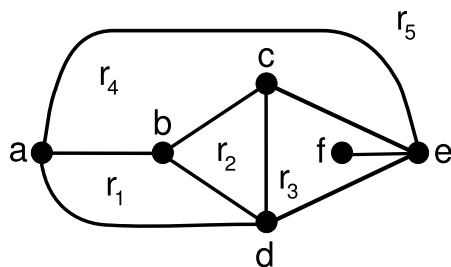
- map divides plane into **regions**
- degree of region: length of closed trail that surrounds region

Theorem

d_{r_i} : degree of region r_i

$$|E| = \frac{\sum_i d_{r_i}}{2}$$

Region Example



$$d_{r_1} = 3$$

$$d_{r_2} = 3$$

$$d_{r_3} = 5$$

$$d_{r_4} = 4$$

$$d_{r_5} = 3$$

$$= 18$$

$$|E| = 9$$

Euler's Formula

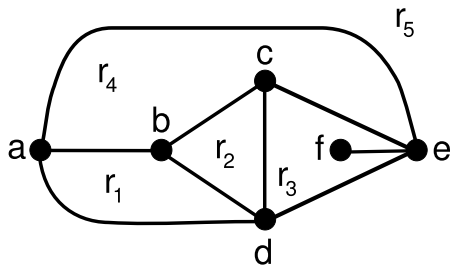
Theorem (Euler's Formula)

$G = (V, E)$: *planar, connected graph*

R : *set of regions in a map of G*

$$|V| - |E| + |R| = 2$$

Euler's Formula Example



■ $|V| = 6, |E| = 9, |R| = 5$

Planar Graph Theorems

Theorem

$G = (V, E)$: *connected, planar graph where* $|V| \geq 3$
 $|E| \leq 3|V| - 6$

Proof.

- sum of region degrees: $2|E|$
- degree of a region ≥ 3
 $\Rightarrow 2|E| \geq 3|R| \Rightarrow |R| \leq \frac{2}{3}|E|$
- $|V| - |E| + |R| = 2$
 $\Rightarrow |V| - |E| + \frac{2}{3}|E| \geq 2 \Rightarrow |V| - \frac{1}{3}|E| \geq 2$
 $\Rightarrow 3|V| - |E| \geq 6 \Rightarrow |E| \leq 3|V| - 6$



Planar Graph Theorems

Theorem

$G = (V, E)$: *connected, planar graph where* $|V| \geq 3$
 $|E| \leq 3|V| - 6$

Proof.

- sum of region degrees: $2|E|$
- degree of a region ≥ 3
 $\Rightarrow 2|E| \geq 3|R| \Rightarrow |R| \leq \frac{2}{3}|E|$
- $|V| - |E| + |R| = 2$
 $\Rightarrow |V| - |E| + \frac{2}{3}|E| \geq 2 \Rightarrow |V| - \frac{1}{3}|E| \geq 2$
 $\Rightarrow 3|V| - |E| \geq 6 \Rightarrow |E| \leq 3|V| - 6$



Planar Graph Theorems

Theorem

$G = (V, E)$: *connected, planar graph where* $|V| \geq 3$
 $|E| \leq 3|V| - 6$

Proof.

- sum of region degrees: $2|E|$
- degree of a region ≥ 3
 $\Rightarrow 2|E| \geq 3|R| \Rightarrow |R| \leq \frac{2}{3}|E|$
- $|V| - |E| + |R| = 2$
 $\Rightarrow |V| - |E| + \frac{2}{3}|E| \geq 2 \Rightarrow |V| - \frac{1}{3}|E| \geq 2$
 $\Rightarrow 3|V| - |E| \geq 6 \Rightarrow |E| \leq 3|V| - 6$



Planar Graph Theorems

Theorem

$G = (V, E)$: *connected, planar graph where* $|V| \geq 3$
 $|E| \leq 3|V| - 6$

Proof.

- sum of region degrees: $2|E|$
- degree of a region ≥ 3
 $\Rightarrow 2|E| \geq 3|R| \Rightarrow |R| \leq \frac{2}{3}|E|$
- $|V| - |E| + |R| = 2$
 $\Rightarrow |V| - |E| + \frac{2}{3}|E| \geq 2 \Rightarrow |V| - \frac{1}{3}|E| \geq 2$
 $\Rightarrow 3|V| - |E| \geq 6 \Rightarrow |E| \leq 3|V| - 6$



Planar Graph Theorems

Theorem

$G = (V, E)$: *connected, planar graph where* $|V| \geq 3$
 $|E| \leq 3|V| - 6$

Proof.

- sum of region degrees: $2|E|$
- degree of a region ≥ 3
 $\Rightarrow 2|E| \geq 3|R| \Rightarrow |R| \leq \frac{2}{3}|E|$
- $|V| - |E| + |R| = 2$
 $\Rightarrow |V| - |E| + \frac{2}{3}|E| \geq 2 \Rightarrow |V| - \frac{1}{3}|E| \geq 2$
 $\Rightarrow 3|V| - |E| \geq 6 \Rightarrow |E| \leq 3|V| - 6$



Planar Graph Theorems

Theorem

$G = (V, E)$: *connected, planar graph where* $|V| \geq 3$
 $|E| \leq 3|V| - 6$

Proof.

- sum of region degrees: $2|E|$
- degree of a region ≥ 3
 $\Rightarrow 2|E| \geq 3|R| \Rightarrow |R| \leq \frac{2}{3}|E|$
- $|V| - |E| + |R| = 2$
 $\Rightarrow |V| - |E| + \frac{2}{3}|E| \geq 2 \Rightarrow |V| - \frac{1}{3}|E| \geq 2$
 $\Rightarrow 3|V| - |E| \geq 6 \Rightarrow |E| \leq 3|V| - 6$



Planar Graph Theorems

Theorem

$G = (V, E)$: *connected, planar graph where* $|V| \geq 3$
 $|E| \leq 3|V| - 6$

Proof.

- sum of region degrees: $2|E|$
- degree of a region ≥ 3
 $\Rightarrow 2|E| \geq 3|R| \Rightarrow |R| \leq \frac{2}{3}|E|$
- $|V| - |E| + |R| = 2$
 $\Rightarrow |V| - |E| + \frac{2}{3}|E| \geq 2 \Rightarrow |V| - \frac{1}{3}|E| \geq 2$
 $\Rightarrow 3|V| - |E| \geq 6 \Rightarrow |E| \leq 3|V| - 6$



Planar Graph Theorems

Theorem

$G = (V, E)$: *connected, planar graph where* $|V| \geq 3$
 $|E| \leq 3|V| - 6$

Proof.

- sum of region degrees: $2|E|$
- degree of a region ≥ 3
 $\Rightarrow 2|E| \geq 3|R| \Rightarrow |R| \leq \frac{2}{3}|E|$
- $|V| - |E| + |R| = 2$
 $\Rightarrow |V| - |E| + \frac{2}{3}|E| \geq 2 \Rightarrow |V| - \frac{1}{3}|E| \geq 2$
 $\Rightarrow 3|V| - |E| \geq 6 \Rightarrow |E| \leq 3|V| - 6$



Planar Graph Theorems

Theorem

$G = (V, E)$: *connected, planar graph where* $|V| \geq 3$
 $|E| \leq 3|V| - 6$

Proof.

- sum of region degrees: $2|E|$
- degree of a region ≥ 3
 $\Rightarrow 2|E| \geq 3|R| \Rightarrow |R| \leq \frac{2}{3}|E|$
- $|V| - |E| + |R| = 2$
 $\Rightarrow |V| - |E| + \frac{2}{3}|E| \geq 2 \Rightarrow |V| - \frac{1}{3}|E| \geq 2$
 $\Rightarrow 3|V| - |E| \geq 6 \Rightarrow |E| \leq 3|V| - 6$



Planar Graph Theorems

Theorem

$G = (V, E)$: *connected, planar graph where* $|V| \geq 3$
 $|E| \leq 3|V| - 6$

Proof.

- sum of region degrees: $2|E|$
- degree of a region ≥ 3
 $\Rightarrow 2|E| \geq 3|R| \Rightarrow |R| \leq \frac{2}{3}|E|$
- $|V| - |E| + |R| = 2$
 $\Rightarrow |V| - |E| + \frac{2}{3}|E| \geq 2 \Rightarrow |V| - \frac{1}{3}|E| \geq 2$
 $\Rightarrow 3|V| - |E| \geq 6 \Rightarrow |E| \leq 3|V| - 6$



Planar Graph Theorems

Theorem

$G = (V, E)$: *connected, planar graph where $|V| \geq 3$:*
 $\exists v \in V [d_v \leq 5]$

Proof.

- assume: $\forall v \in V [d_v \geq 6]$
 $\Rightarrow 2|E| \geq 6|V|$
 $\Rightarrow |E| \geq 3|V|$
 $\Rightarrow |E| > 3|V| - 6$



Planar Graph Theorems

Theorem

$G = (V, E)$: *connected, planar graph where $|V| \geq 3$:*
 $\exists v \in V [d_v \leq 5]$

Proof.

■ assume: $\forall v \in V [d_v \geq 6]$

$$\Rightarrow 2|E| \geq 6|V|$$

$$\Rightarrow |E| \geq 3|V|$$

$$\Rightarrow |E| > 3|V| - 6$$



Planar Graph Theorems

Theorem

$G = (V, E)$: *connected, planar graph where $|V| \geq 3$:*
 $\exists v \in V [d_v \leq 5]$

Proof.

- assume: $\forall v \in V [d_v \geq 6]$
 $\Rightarrow 2|E| \geq 6|V|$
 $\Rightarrow |E| \geq 3|V|$
 $\Rightarrow |E| > 3|V| - 6$



Planar Graph Theorems

Theorem

$G = (V, E)$: connected, planar graph where $|V| \geq 3$:
 $\exists v \in V [d_v \leq 5]$

Proof.

- assume: $\forall v \in V [d_v \geq 6]$
 $\Rightarrow 2|E| \geq 6|V|$
 $\Rightarrow |E| \geq 3|V|$
 $\Rightarrow |E| > 3|V| - 6$



Planar Graph Theorems

Theorem

$G = (V, E)$: connected, planar graph where $|V| \geq 3$:
 $\exists v \in V [d_v \leq 5]$

Proof.

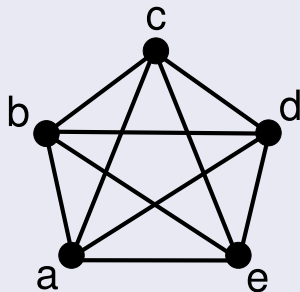
- assume: $\forall v \in V [d_v \geq 6]$
 - $\Rightarrow 2|E| \geq 6|V|$
 - $\Rightarrow |E| \geq 3|V|$
 - $\Rightarrow |E| > 3|V| - 6$



Nonplanar Graphs

Theorem

K_5 is not planar.



Proof.

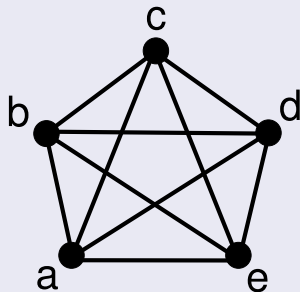
- $|V| = 5$
- $3|V| - 6 = 3 \cdot 5 - 6 = 9$
- $|E| \leq 9$ should hold
- but $|E| = 10$



Nonplanar Graphs

Theorem

K_5 is not planar.



Proof.

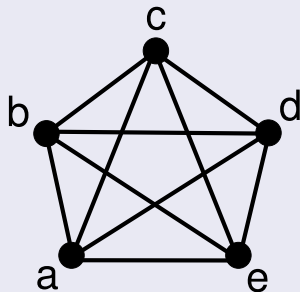
- $|V| = 5$
- $3|V| - 6 = 3 \cdot 5 - 6 = 9$
- $|E| \leq 9$ should hold
- but $|E| = 10$



Nonplanar Graphs

Theorem

K_5 is not planar.



Proof.

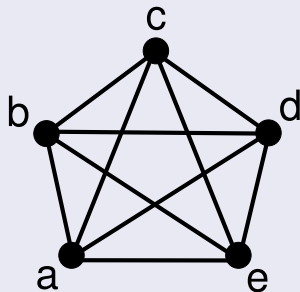
- $|V| = 5$
- $3|V| - 6 = 3 \cdot 5 - 6 = 9$
- $|E| \leq 9$ should hold
- but $|E| = 10$



Nonplanar Graphs

Theorem

K_5 is not planar.



Proof.

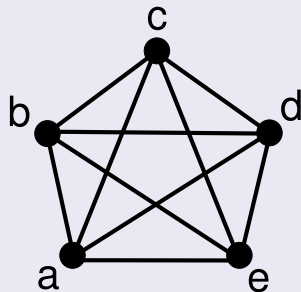
- $|V| = 5$
- $3|V| - 6 = 3 \cdot 5 - 6 = 9$
- $|E| \leq 9$ should hold
- but $|E| = 10$



Nonplanar Graphs

Theorem

K_5 is not planar.



Proof.

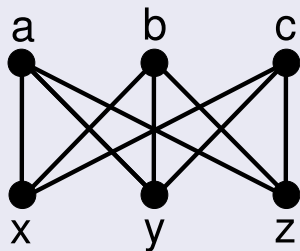
- $|V| = 5$
- $3|V| - 6 = 3 \cdot 5 - 6 = 9$
- $|E| \leq 9$ should hold
- but $|E| = 10$



Nonplanar Graphs

Theorem

$K_{3,3}$ is not planar.



Proof.

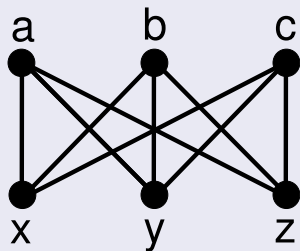
- $|V| = 6, |E| = 9$
- if planar then $|R| = 5$
- degree of a region ≥ 4
 $\Rightarrow \sum_{r \in R} d_r \geq 20$
- $|E| \geq 10$ should hold
- but $|E| = 9$



Nonplanar Graphs

Theorem

$K_{3,3}$ is not planar.



Proof.

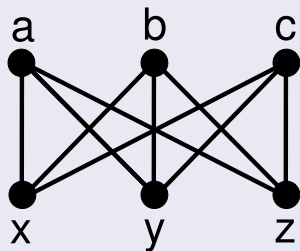
- $|V| = 6, |E| = 9$
- if planar then $|R| = 5$
- degree of a region ≥ 4
 $\Rightarrow \sum_{r \in R} d_r \geq 20$
- $|E| \geq 10$ should hold
- but $|E| = 9$



Nonplanar Graphs

Theorem

$K_{3,3}$ is not planar.



Proof.

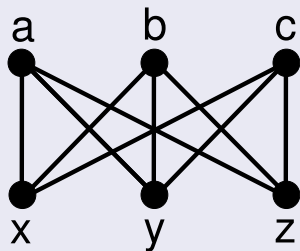
- $|V| = 6, |E| = 9$
- if planar then $|R| = 5$
- degree of a region ≥ 4
 $\Rightarrow \sum_{r \in R} d_r \geq 20$
- $|E| \geq 10$ should hold
- but $|E| = 9$



Nonplanar Graphs

Theorem

$K_{3,3}$ is not planar.



Proof.

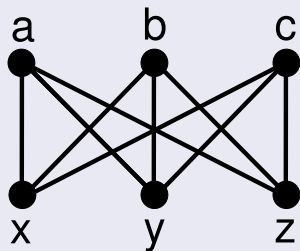
- $|V| = 6, |E| = 9$
- if planar then $|R| = 5$
- degree of a region ≥ 4
 $\Rightarrow \sum_{r \in R} d_r \geq 20$
- $|E| \geq 10$ should hold
- but $|E| = 9$



Nonplanar Graphs

Theorem

$K_{3,3}$ is not planar.



Proof.

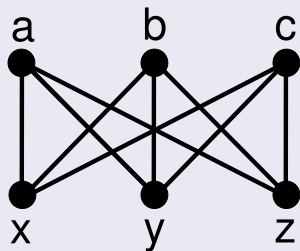
- $|V| = 6, |E| = 9$
- if planar then $|R| = 5$
- degree of a region ≥ 4
 $\Rightarrow \sum_{r \in R} d_r \geq 20$
- $|E| \geq 10$ should hold
- but $|E| = 9$



Nonplanar Graphs

Theorem

$K_{3,3}$ is not planar.



Proof.

- $|V| = 6, |E| = 9$
- if planar then $|R| = 5$
- degree of a region ≥ 4
 $\Rightarrow \sum_{r \in R} d_r \geq 20$
- $|E| \geq 10$ should hold
- but $|E| = 9$



Kuratowski's Theorem

Theorem

G contains a subgraph homeomorphic to K_5 or $K_{3,3}$.

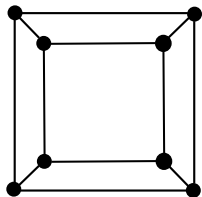
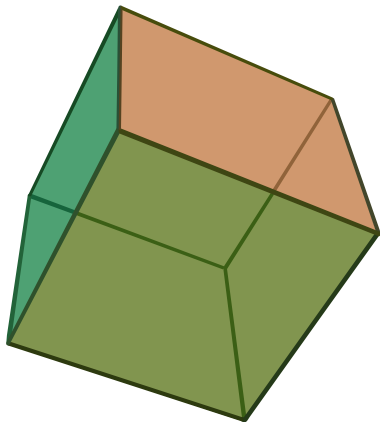
\Leftrightarrow

G is not planar.

Platonic Solids

- *regular polyhedron*: a 3-dimensional solid where faces are identical regular polygons
- projection of a regular polyhedron onto the plane: a planar graph
- corners: nodes
- sides: edges
- faces: regions

Platonic Solid Example



Platonic Solids

- $|V|$: number of corners (nodes)
 - $|E|$: number of sides (edges)
 - $|R|$: number of faces (regions)
 - n : number of faces meeting at a corner (node degree)
 - m : number of sides of a face (region degree)
-
- $m, n \geq 3$
 - $2|E| = n \cdot |V|$
 - $2|E| = m \cdot |R|$

Platonic Solids

- $|V|$: number of corners (nodes)
- $|E|$: number of sides (edges)
- $|R|$: number of faces (regions)
- n : number of faces meeting at a corner (node degree)
- m : number of sides of a face (region degree)

- $m, n \geq 3$
- $2|E| = n \cdot |V|$
- $2|E| = m \cdot |R|$

Platonic Solids

- from Euler's formula:

$$2 = |V| - |E| + |R| = \frac{2|E|}{n} - |E| + \frac{2|E|}{m} = |E| \left(\frac{2m - mn + 2n}{mn} \right) > 0$$

- $|E|, m, n > 0$:

$$\begin{aligned} 2m - mn + 2n > 0 &\Rightarrow mn - 2m - 2n < 0 \\ \Rightarrow mn - 2m - 2n + 4 &< 4 \Rightarrow (m-2)(n-2) < 4 \end{aligned}$$

- only 5 solutions

Platonic Solids

- from Euler's formula:

$$2 = |V| - |E| + |R| = \frac{2|E|}{n} - |E| + \frac{2|E|}{m} = |E| \left(\frac{2m - mn + 2n}{mn} \right) > 0$$

- $|E|, m, n > 0$:

$$\begin{aligned} 2m - mn + 2n > 0 &\Rightarrow mn - 2m - 2n < 0 \\ &\Rightarrow mn - 2m - 2n + 4 < 4 \Rightarrow (m-2)(n-2) < 4 \end{aligned}$$

- only 5 solutions

Platonic Solids

- from Euler's formula:

$$2 = |V| - |E| + |R| = \frac{2|E|}{n} - |E| + \frac{2|E|}{m} = |E| \left(\frac{2m - mn + 2n}{mn} \right) > 0$$

- $|E|, m, n > 0$:

$$\begin{aligned} 2m - mn + 2n > 0 &\Rightarrow mn - 2m - 2n < 0 \\ \Rightarrow mn - 2m - 2n + 4 &< 4 \Rightarrow (m-2)(n-2) < 4 \end{aligned}$$

- only 5 solutions

Platonic Solids

- from Euler's formula:

$$2 = |V| - |E| + |R| = \frac{2|E|}{n} - |E| + \frac{2|E|}{m} = |E| \left(\frac{2m - mn + 2n}{mn} \right) > 0$$

- $|E|, m, n > 0$:

$$\begin{aligned} 2m - mn + 2n > 0 &\Rightarrow mn - 2m - 2n < 0 \\ \Rightarrow mn - 2m - 2n + 4 &< 4 \Rightarrow (m - 2)(n - 2) < 4 \end{aligned}$$

- only 5 solutions

Platonic Solids

- from Euler's formula:

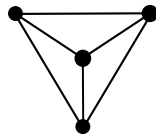
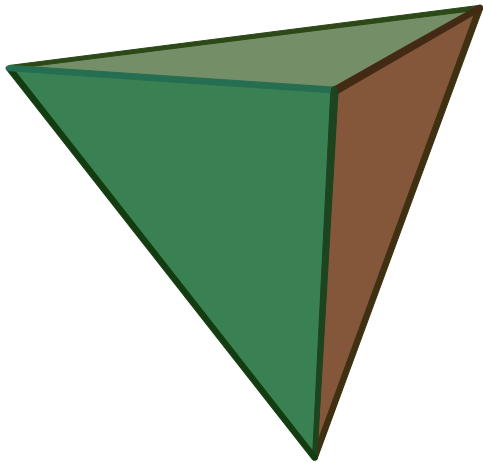
$$2 = |V| - |E| + |R| = \frac{2|E|}{n} - |E| + \frac{2|E|}{m} = |E| \left(\frac{2m - mn + 2n}{mn} \right) > 0$$

- $|E|, m, n > 0$:

$$\begin{aligned} 2m - mn + 2n > 0 &\Rightarrow mn - 2m - 2n < 0 \\ \Rightarrow mn - 2m - 2n + 4 &< 4 \Rightarrow (m - 2)(n - 2) < 4 \end{aligned}$$

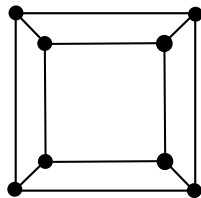
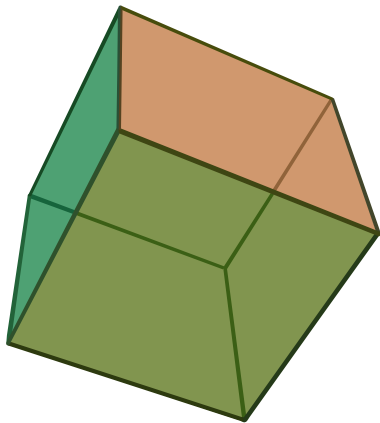
- only 5 solutions

Tetrahedron



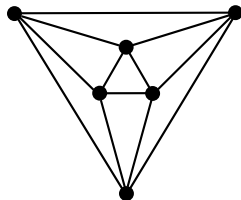
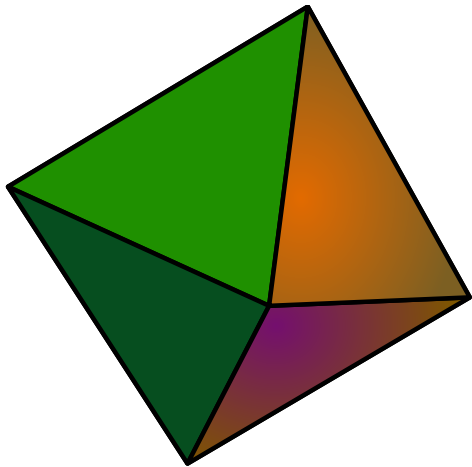
$$m = 3, n = 3$$

Hexahedron



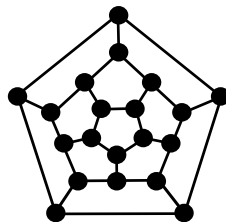
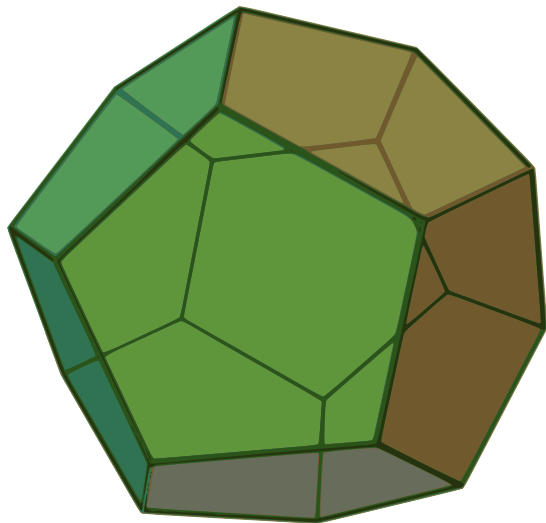
$$m = 4, n = 3$$

Octahedron



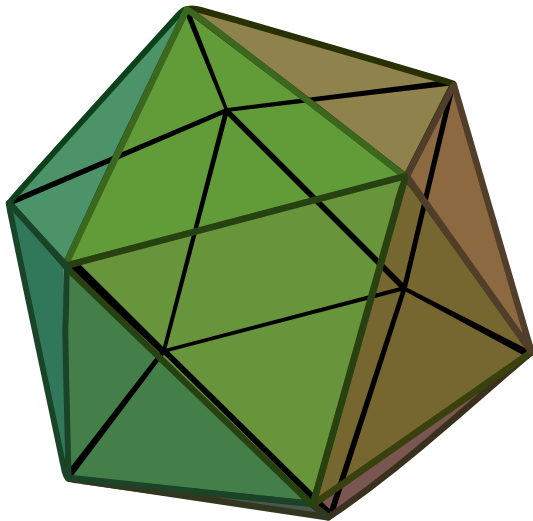
$$m = 3, n = 4$$

Dodecahedron



$$m = 5, n = 3$$

Icosahedron



$$m = 3, n = 5$$

Topics

1 Graphs

- Introduction
- Walks
- Traversable Graphs
- Planar Graphs

2 Graph Problems

- **Connectivity**
- Graph Coloring
- Shortest Path
- TSP
- Searching Graphs

Connectivity Matrix

- A : adjacency matrix of $G = (V, E)$
- A_{ij}^k : number of walks of length k between v_i and v_j
- maximum distance between two nodes: $|V| - 1$
- connectivity matrix:
$$C = A^1 + A^2 + A^3 + \dots + A^{|V|-1}$$
- connected: all elements of C are non-zero

Connectivity Matrix

- A : adjacency matrix of $G = (V, E)$
- A_{ij}^k : number of walks of length k between v_i and v_j
- maximum distance between two nodes: $|V| - 1$
- connectivity matrix:
$$C = A^1 + A^2 + A^3 + \dots + A^{|V|-1}$$
- connected: all elements of C are non-zero

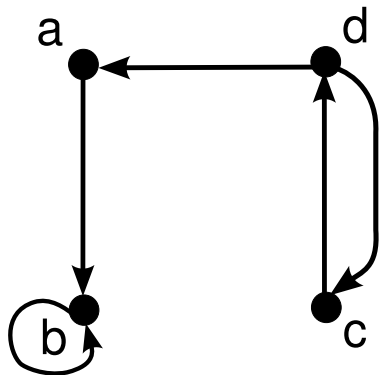
Warshall's Algorithm

- very expensive to compute the connectivity matrix
- easier to find whether there is a walk between two nodes rather than finding the number of walks
- for each node:
 - from all nodes which can reach the current node (rows that contain 1 in current column)
 - to all nodes which can be reached from the current node (columns that contain 1 in current row)

Warshall's Algorithm

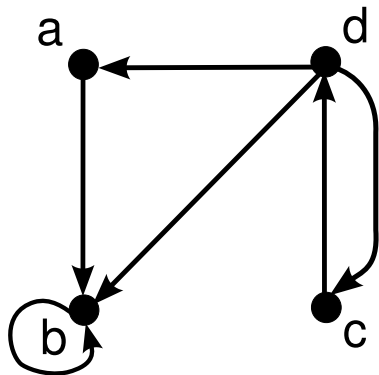
- very expensive to compute the connectivity matrix
- easier to find whether there is a walk between two nodes rather than finding the number of walks
- for each node:
 - from all nodes which can reach the current node (rows that contain 1 in current column)
 - to all nodes which can be reached from the current node (columns that contain 1 in current row)

Warshall's Algorithm Example



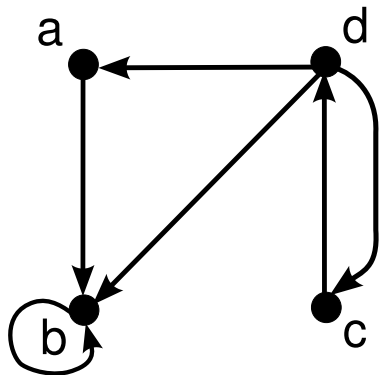
	<i>a</i>	<i>b</i>	<i>c</i>	<i>d</i>
<i>a</i>	0	1	0	0
<i>b</i>	0	1	0	0
<i>c</i>	0	0	0	1
<i>d</i>	1	0	1	0

Warshall's Algorithm Example



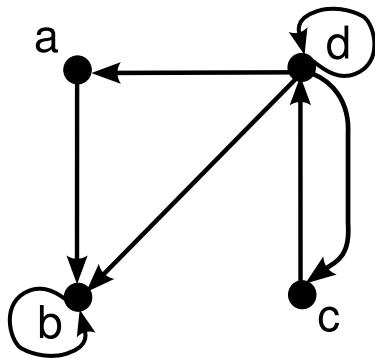
	<i>a</i>	<i>b</i>	<i>c</i>	<i>d</i>
<i>a</i>	0	1	0	0
<i>b</i>	0	1	0	0
<i>c</i>	0	0	0	1
<i>d</i>	1	1	1	0

Warshall's Algorithm Example



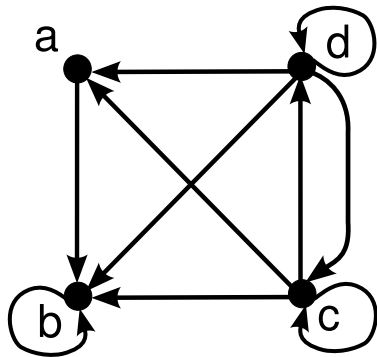
	<i>a</i>	<i>b</i>	<i>c</i>	<i>d</i>
<i>a</i>	0	1	0	0
<i>b</i>	0	1	0	0
<i>c</i>	0	0	0	1
<i>d</i>	1	1	1	0

Warshall's Algorithm Example



	<i>a</i>	<i>b</i>	<i>c</i>	<i>d</i>
<i>a</i>	0	1	0	0
<i>b</i>	0	1	0	0
<i>c</i>	0	0	0	1
<i>d</i>	1	1	1	1

Warshall's Algorithm Example



	<i>a</i>	<i>b</i>	<i>c</i>	<i>d</i>
<i>a</i>	0	1	0	0
<i>b</i>	0	1	0	0
<i>c</i>	1	1	1	1
<i>d</i>	1	1	1	1

Topics

1 Graphs

- Introduction
- Walks
- Traversable Graphs
- Planar Graphs

2 Graph Problems

- Connectivity
- Graph Coloring
- Shortest Path
- TSP
- Searching Graphs

Graph Coloring

- $G = (V, E)$, C : set of colors
- **proper coloring** of G : find an $f : V \rightarrow C$, such that
 $\forall (v_i, v_j) \in E [f(v_i) \neq f(v_j)]$
- **chromatic number** of G : $\chi(G)$
minimum $|C|$
- finding $\chi(G)$ is a very difficult problem
- $\chi(K_n) = n$

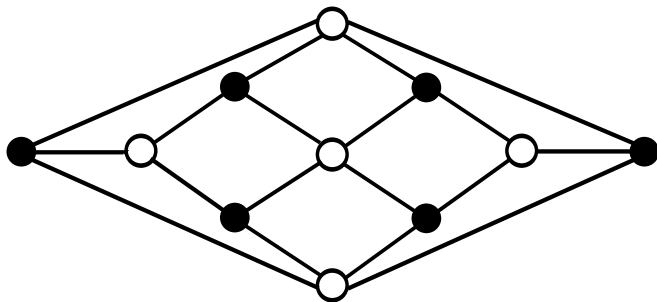
Graph Coloring

- $G = (V, E)$, C : set of colors
- **proper coloring** of G : find an $f : V \rightarrow C$, such that
 $\forall (v_i, v_j) \in E [f(v_i) \neq f(v_j)]$
- **chromatic number** of G : $\chi(G)$
minimum $|C|$
- finding $\chi(G)$ is a very difficult problem
- $\chi(K_n) = n$

Graph Coloring

- $G = (V, E)$, C : set of colors
- **proper coloring** of G : find an $f : V \rightarrow C$, such that
 $\forall (v_i, v_j) \in E [f(v_i) \neq f(v_j)]$
- **chromatic number** of G : $\chi(G)$
minimum $|C|$
- finding $\chi(G)$ is a very difficult problem
- $\chi(K_n) = n$

Chromatic Number Example



- Herschel graph: $\chi(G) = 2$

Graph Coloring Solution

- pick a node and assign a color
- assign same color to all nodes with no conflict
- pick an uncolored node and assign a second color
- assign same color to all uncolored nodes with no conflict
- pick an uncolored node and assign a third color
- ...

Heuristic Solutions

- **heuristic** solution: based on intuition
- **greedy** solution: doesn't look ahead
- doesn't produce optimal results

Graph Coloring Example

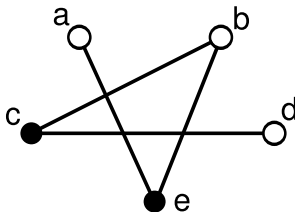
- a company produces chemical compounds
- some compounds cannot be stored together
- such compounds must be placed in separate storage areas
- store compounds using minimum number of storage areas

Graph Coloring Example

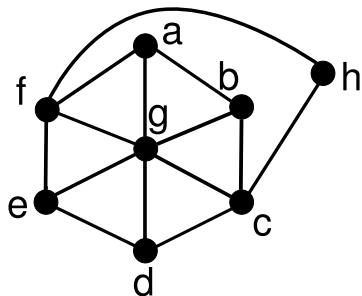
- a company produces chemical compounds
- some compounds cannot be stored together
- such compounds must be placed in separate storage areas
- store compounds using minimum number of storage areas

Graph Coloring Example

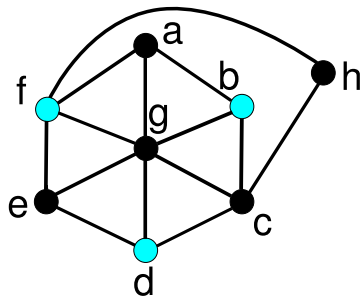
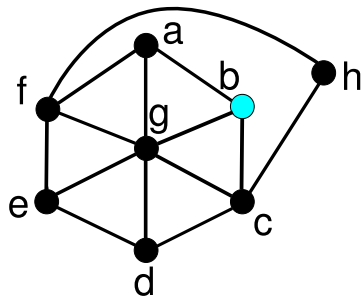
- every compound is a node
- two compounds that cannot be stored together are adjacent



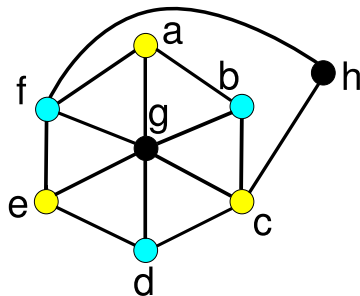
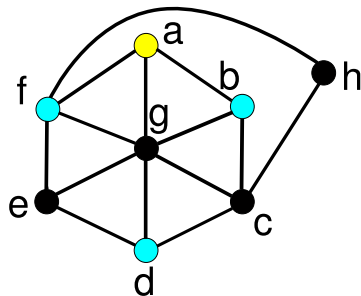
Graph Coloring Example



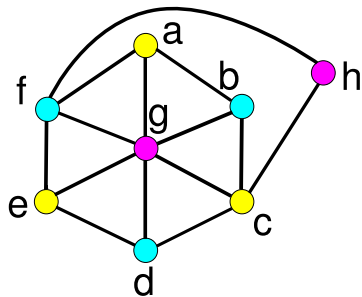
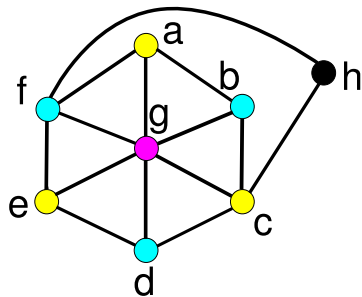
Graph Coloring Example



Graph Coloring Example



Graph Coloring Example



Graph Coloring Example: Sudoku

5	3			7				
6			1	9	5			
	9	8					6	
8				6				3
4			8		3			1
7				2				6
	6					2	8	
			4	1	9			5
				8			7	9

- every cell is a node
 - cells of the same row are adjacent
 - cells of the same column are adjacent
 - cells of the same 3×3 block are adjacent
 - every number is a color
- problem: properly color a graph that is partially colored

Graph Coloring Example: Sudoku

5	3			7				
6			1	9	5			
	9	8					6	
8				6				3
4			8		3			1
7				2				6
	6					2	8	
			4	1	9			5
				8			7	9

- every cell is a node
- cells of the same row are adjacent
- cells of the same column are adjacent
- cells of the same 3×3 block are adjacent
- every number is a color
- problem: properly color a graph that is partially colored

Region Coloring

- coloring a map by assigning different colors to adjacent regions

Theorem (Four Color Theorem)

The regions in a map can be colored using four colors.

Topics

1 Graphs

- Introduction
- Walks
- Traversable Graphs
- Planar Graphs

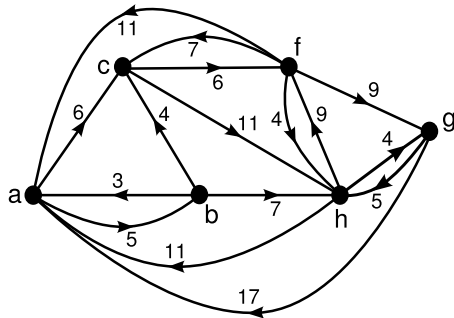
2 Graph Problems

- Connectivity
- Graph Coloring
- Shortest Path
- TSP
- Searching Graphs

Shortest Path

- finding shortest paths from a starting node to all other nodes: Dijkstra's algorithm

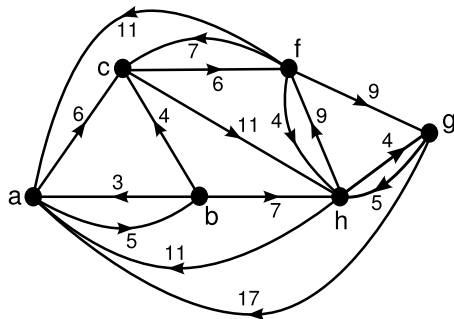
Dijkstra's Algorithm Example



■ starting node: c

a	$(\infty, -)$
b	$(\infty, -)$
c	$(0, -)$
f	$(\infty, -)$
g	$(\infty, -)$
h	$(\infty, -)$

Dijkstra's Algorithm Example



■ from c: base distance=0

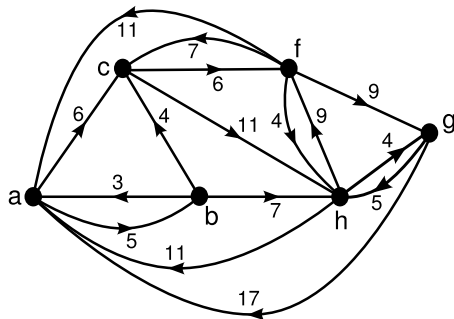
■ $c \rightarrow f : 6, 6 < \infty$

■ $c \rightarrow h : 11, 11 < \infty$

a	$(\infty, -)$	
b	$(\infty, -)$	
c	$(0, -)$	✓
f	$(6, cf)$	
g	$(\infty, -)$	
h	$(11, ch)$	

■ closest node: f

Dijkstra's Algorithm Example



■ from c: base distance=0

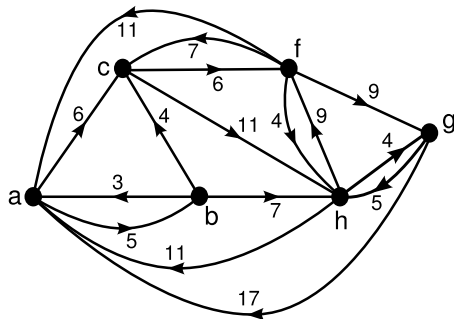
■ $c \rightarrow f : 6, 6 < \infty$

■ $c \rightarrow h : 11, 11 < \infty$

a	$(\infty, -)$	
b	$(\infty, -)$	
c	$(0, -)$	✓
f	$(6, cf)$	
g	$(\infty, -)$	
h	$(11, ch)$	

■ closest node: f

Dijkstra's Algorithm Example



■ from c: base distance=0

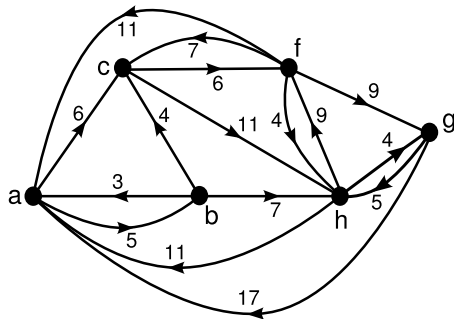
■ $c \rightarrow f : 6, 6 < \infty$

■ $c \rightarrow h : 11, 11 < \infty$

a	$(\infty, -)$	
b	$(\infty, -)$	
c	$(0, -)$	✓
f	$(6, cf)$	
g	$(\infty, -)$	
h	$(11, ch)$	

■ closest node: f

Dijkstra's Algorithm Example



■ from f : base distance=6

■ $f \rightarrow a : 6 + 11, 17 < \infty$

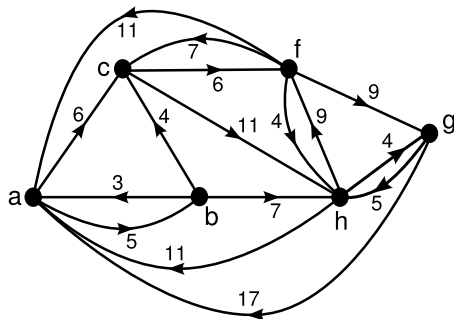
■ $f \rightarrow g : 6 + 9, 15 < \infty$

■ $f \rightarrow h : 6 + 4, 10 < 11$

a	(17, cfa)	
b	(∞ , -)	
c	(0, -)	✓
f	(6, cf)	✓
g	(15, cfg)	
h	(10, cfh)	

■ closest node: h

Dijkstra's Algorithm Example

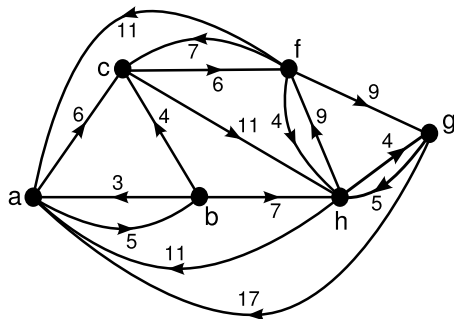


- from f : base distance=6
- $f \rightarrow a : 6 + 11, 17 < \infty$
- $f \rightarrow g : 6 + 9, 15 < \infty$
- $f \rightarrow h : 6 + 4, 10 < 11$

a	(17, cfa)	
b	(∞ , -)	
c	(0, -)	✓
f	(6, cf)	✓
g	(15, cfg)	
h	(10, cfh)	

■ closest node: h

Dijkstra's Algorithm Example

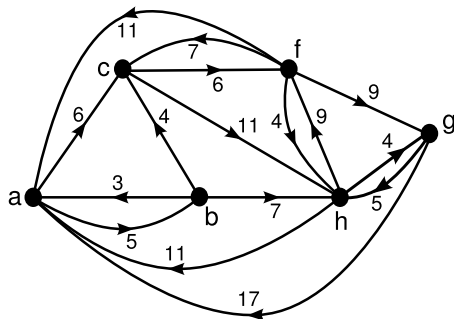


- from f : base distance=6
- $f \rightarrow a : 6 + 11, 17 < \infty$
- $f \rightarrow g : 6 + 9, 15 < \infty$
- $f \rightarrow h : 6 + 4, 10 < 11$

a	(17, cfa)	
b	(∞ , -)	
c	(0, -)	✓
f	(6, cf)	✓
g	(15, cfg)	
h	(10, cfh)	

- closest node: h

Dijkstra's Algorithm Example

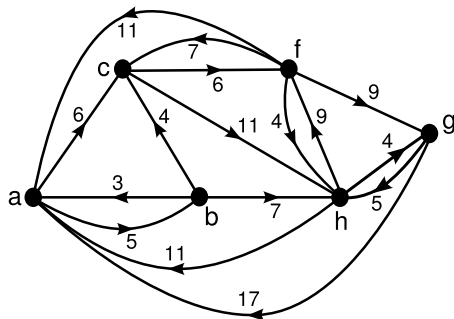


- from h : base distance=10
- $h \rightarrow a : 10 + 11, 21 \not< 17$
- $h \rightarrow g : 10 + 4, 14 < 15$

a	(17, cfa)	
b	(∞ , -)	
c	(0, -)	✓
f	(6, cf)	✓
g	(14, cfhg)	
h	(10, cfh)	✓

- closest node: g

Dijkstra's Algorithm Example

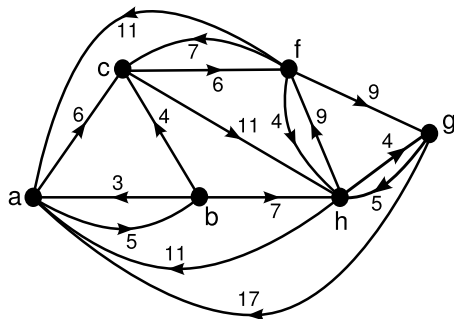


- from h : base distance=10
- $h \rightarrow a$: $10 + 11, 21 \not< 17$
- $h \rightarrow g$: $10 + 4, 14 < 15$

a	(17, cfa)	
b	(∞ , -)	
c	(0, -)	✓
f	(6, cf)	✓
g	(14, cfhg)	
h	(10, cfh)	✓

■ closest node: g

Dijkstra's Algorithm Example



■ from h : base distance=10

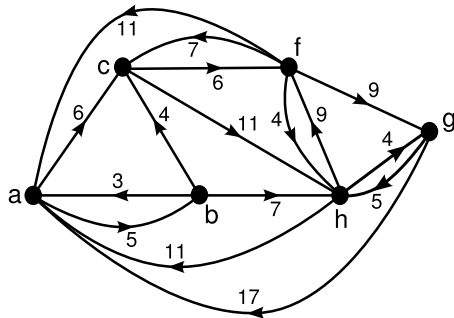
■ $h \rightarrow a : 10 + 11, 21 \not< 17$

■ $h \rightarrow g : 10 + 4, 14 < 15$

a	(17, cfa)	
b	(∞ , -)	
c	(0, -)	✓
f	(6, cf)	✓
g	(14, cfhg)	
h	(10, cfh)	✓

■ closest node: g

Dijkstra's Algorithm Example



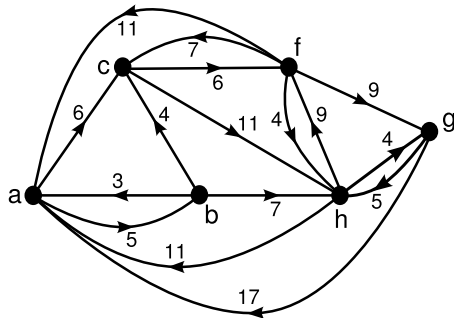
■ from g : base distance=14

■ $g \rightarrow a : 14 + 17, 31 \not\leq 17$

a	(17, cfa)	
b	(∞ , -)	
c	(0, -)	✓
f	(6, cf)	✓
g	(14, cfhg)	✓
h	(10, cfh)	✓

■ closest node: a

Dijkstra's Algorithm Example

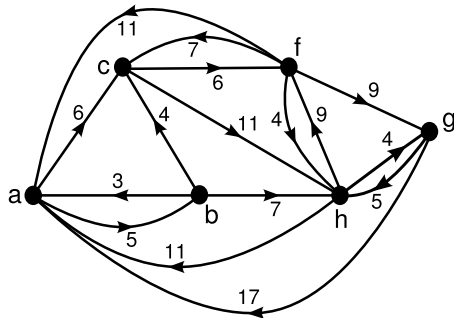


- from g : base distance=14
- $g \rightarrow a : 14 + 17, 31 \not\leq 17$

a	(17, cfa)	
b	(∞ , -)	
c	(0, -)	✓
f	(6, cf)	✓
g	(14, cfhg)	✓
h	(10, cfh)	✓

■ closest node: a

Dijkstra's Algorithm Example



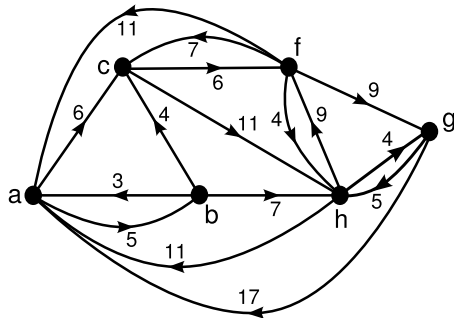
■ from g : base distance=14

■ $g \rightarrow a : 14 + 17, 31 \not\leq 17$

a	(17, cfa)	
b	(∞ , -)	
c	(0, -)	✓
f	(6, cf)	✓
g	(14, cfhg)	✓
h	(10, cfh)	✓

■ closest node: a

Dijkstra's Algorithm Example



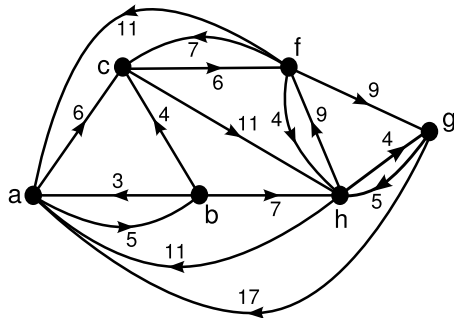
■ from a : base distance=17

■ $a \rightarrow b : 17 + 5, 22 < \infty$

a	(17, cfa)	✓
b	(22, cfab)	
c	(0, -)	✓
f	(6, cf)	✓
g	(14, cfhg)	✓
h	(10, cfh)	✓

■ last node: b

Dijkstra's Algorithm Example



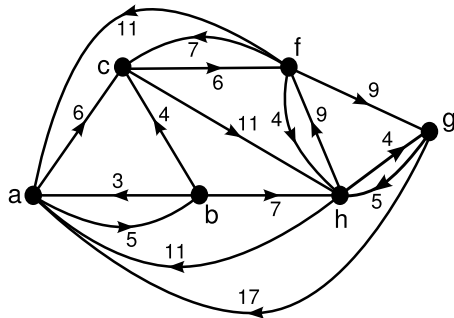
■ from a : base distance=17

■ $a \rightarrow b$: $17 + 5, 22 < \infty$

a	(17, cfa)	✓
b	(22, cfab)	
c	(0, -)	✓
f	(6, cf)	✓
g	(14, cfhg)	✓
h	(10, cfh)	✓

■ last node: b

Dijkstra's Algorithm Example



■ from a : base distance=17

■ $a \rightarrow b$: $17 + 5, 22 < \infty$

a	(17, cfa)	✓
b	(22, cfab)	
c	(0, -)	✓
f	(6, cf)	✓
g	(14, cfhg)	✓
h	(10, cfh)	✓

■ last node: b

Topics

1 Graphs

- Introduction
- Walks
- Traversable Graphs
- Planar Graphs

2 Graph Problems

- Connectivity
- Graph Coloring
- Shortest Path
- **TSP**
- Searching Graphs

Traveling Salesperson Problem

- start from a home town
- visit every city exactly once
- return to the home town
- minimum total distance
- find Hamiltonian cycle
- very difficult problem

Traveling Salesperson Problem

- start from a home town
- visit every city exactly once
- return to the home town
- minimum total distance
- find Hamiltonian cycle
- very difficult problem

TSP Solution

- heuristic: nearest-neighbor

Topics

1 Graphs

- Introduction
- Walks
- Traversable Graphs
- Planar Graphs

2 Graph Problems

- Connectivity
- Graph Coloring
- Shortest Path
- TSP
- Searching Graphs

Searching Graphs

- searching nodes of graph $G = (V, E)$ starting from node v_1
- depth-first
- breadth-first

Depth-First Search

- 1 $v \leftarrow v_1, T = \emptyset, D = \{v_1\}$
- 2 find smallest i in $2 \leq i \leq |V|$ such that $(v, v_i) \in E$ and $v_i \notin D$
 - if no such i : go to step 3
 - if found: $T = T \cup \{(v, v_i)\}, D = D \cup \{v_i\}, v \leftarrow v_i,$
go to step 2
- 3 if $v = v_1$: result is T
- 4 if $v \neq v_1$: $v \leftarrow \text{backtrack}(v)$, go to step 2

Depth-First Search

- 1 $v \leftarrow v_1, T = \emptyset, D = \{v_1\}$
- 2 find smallest i in $2 \leq i \leq |V|$ such that $(v, v_i) \in E$ and $v_i \notin D$
 - if no such i : go to step 3
 - if found: $T = T \cup \{(v, v_i)\}, D = D \cup \{v_i\}, v \leftarrow v_i,$
go to step 2
- 3 if $v = v_1$: result is T
- 4 if $v \neq v_1$: $v \leftarrow \text{backtrack}(v)$, go to step 2

Depth-First Search

- 1 $v \leftarrow v_1, T = \emptyset, D = \{v_1\}$
- 2 find smallest i in $2 \leq i \leq |V|$ such that $(v, v_i) \in E$ and $v_i \notin D$
 - if no such i : go to step 3
 - if found: $T = T \cup \{(v, v_i)\}, D = D \cup \{v_i\}, v \leftarrow v_i,$
go to step 2
- 3 if $v = v_1$: result is T
- 4 if $v \neq v_1$: $v \leftarrow \text{backtrack}(v)$, go to step 2

Depth-First Search

- 1 $v \leftarrow v_1, T = \emptyset, D = \{v_1\}$
- 2 find smallest i in $2 \leq i \leq |V|$ such that $(v, v_i) \in E$ and $v_i \notin D$
 - if no such i : go to step 3
 - if found: $T = T \cup \{(v, v_i)\}, D = D \cup \{v_i\}, v \leftarrow v_i,$
go to step 2
- 3 if $v = v_1$: result is T
- 4 if $v \neq v_1$: $v \leftarrow \text{backtrack}(v)$, go to step 2

Breadth-First Search

- 1 $T = \emptyset, D = \{v_1\}, Q = (v_1)$
- 2 if Q empty: result is T
- 3 if Q not empty: $v \leftarrow \text{front}(Q), Q \leftarrow Q - v$
for $2 \leq i \leq |V|$ check edges $(v, v_i) \in E$:
 - if $v_i \notin D$: $Q = Q + v_i, T = T \cup \{(v, v_i)\}, D = D \cup \{v_i\}$
 - go to step 3

Breadth-First Search

- 1 $T = \emptyset$, $D = \{v_1\}$, $Q = (v_1)$
- 2 if Q empty: result is T
- 3 if Q not empty: $v \leftarrow \text{front}(Q)$, $Q \leftarrow Q - v$
for $2 \leq i \leq |V|$ check edges $(v, v_i) \in E$:
 - if $v_i \notin D$: $Q = Q + v_i$, $T = T \cup \{(v, v_i)\}$, $D = D \cup \{v_i\}$
 - go to step 3

References

Required Reading: Grimaldi

- Chapter 11: **An Introduction to Graph Theory**
- Chapter 7: Relations: The Second Time Around
 - 7.2. **Computer Recognition: Zero-One Matrices and Directed Graphs**
- Chapter 13: Optimization and Matching
 - 13.1. **Dijkstra's Shortest Path Algorithm**